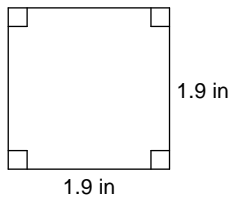


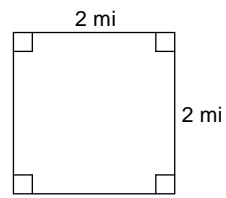
Finding the Area of a Square or Rectangle

Find the area of each.

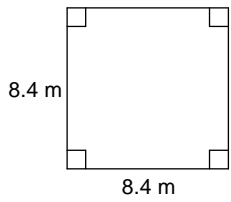
1)



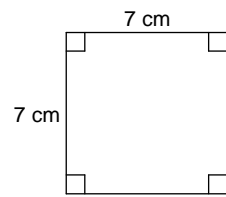
2)



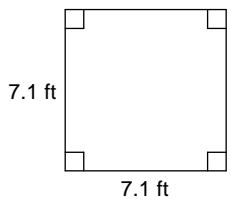
3)



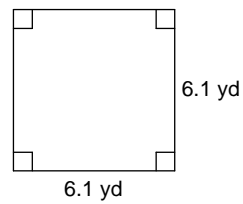
4)



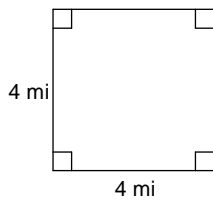
5)



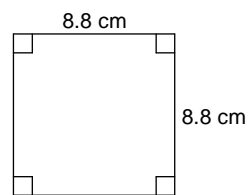
6)



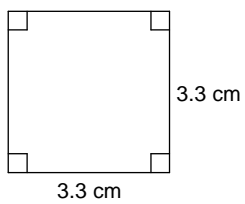
7)



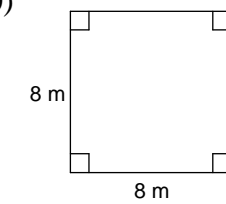
8)



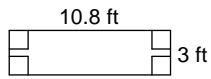
9)



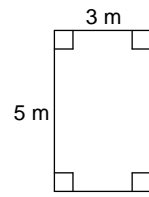
10)



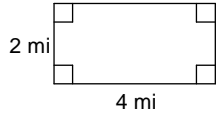
11)



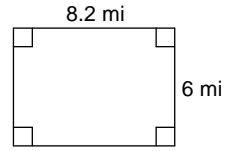
12)



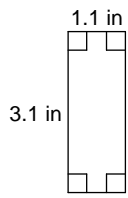
13)



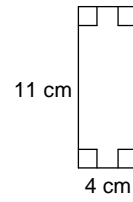
14)



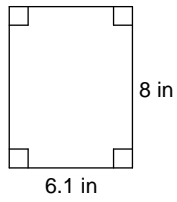
15)



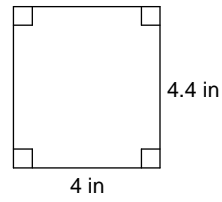
16)



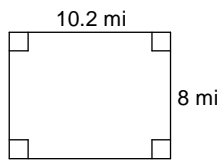
17)



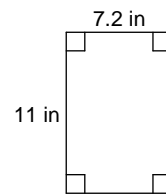
18)



19)



20)



Answers to Finding the Area of a Square or Rectangle

- | | | | |
|-------------------------|-------------------------|-------------------------|-------------------------|
| 1) 3.61 in^2 | 2) 4 mi^2 | 3) 70.56 m^2 | 4) 49 cm^2 |
| 5) 50.41 ft^2 | 6) 37.21 yd^2 | 7) 16 mi^2 | 8) 77.44 cm^2 |
| 9) 10.89 cm^2 | 10) 64 m^2 | 11) 32.4 ft^2 | 12) 15 m^2 |
| 13) 8 mi^2 | 14) 49.2 mi^2 | 15) 3.41 in^2 | 16) 44 cm^2 |
| 17) 48.8 in^2 | 18) 17.6 in^2 | 19) 81.6 mi^2 | 20) 79.2 in^2 |